


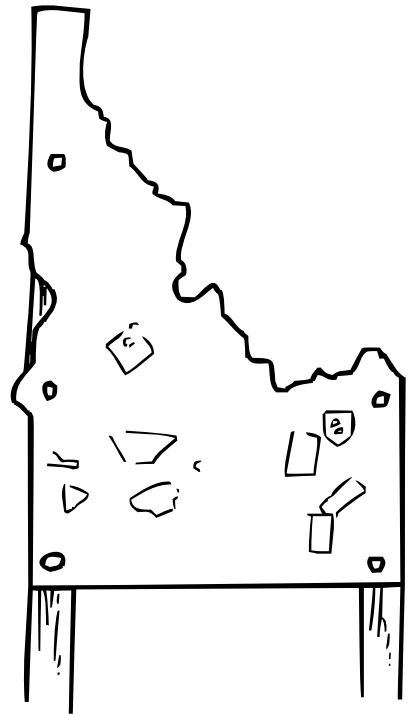
IDAHO ACTIVITY PACKET



Exclusively for members of MrNussbaum.com

https://pixabay.com/users/nicholas_demetriades-11327359/







IDAHO

Idaho State Quarter





IDAHO



Mountain Bluebird



Syringa




The Gem State

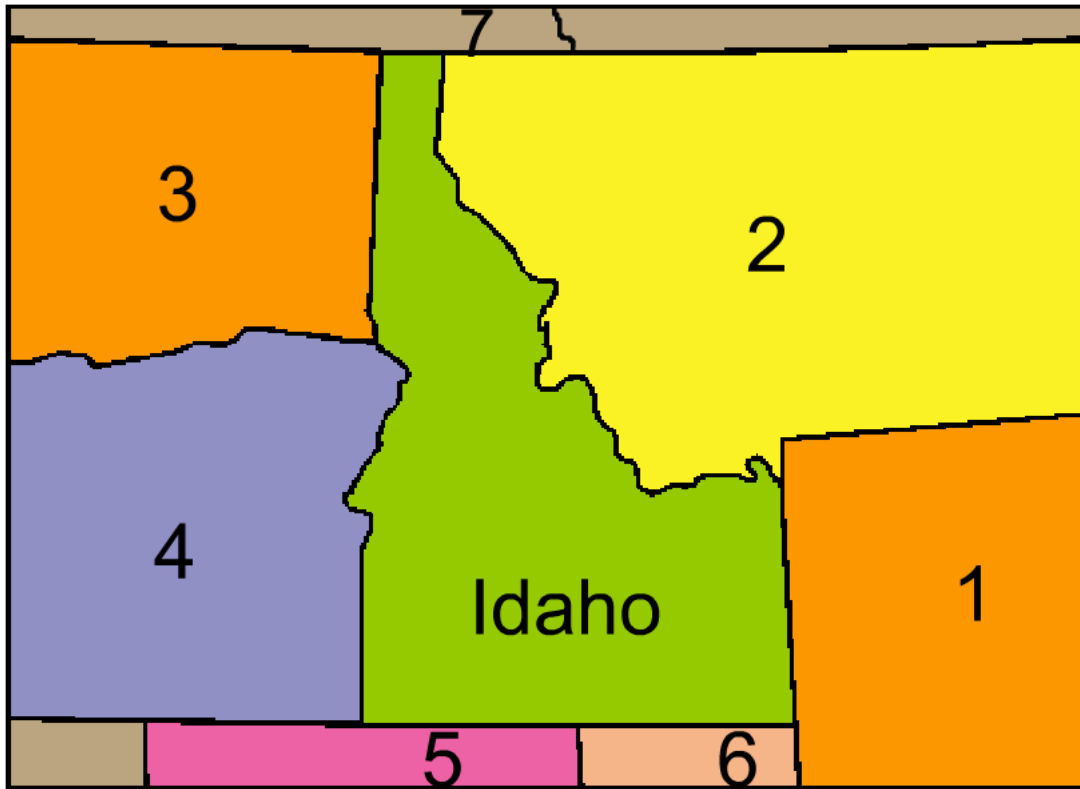


Western White Pine

State license plate



Idaho Label-me Map – Bordering States and Bodies of water

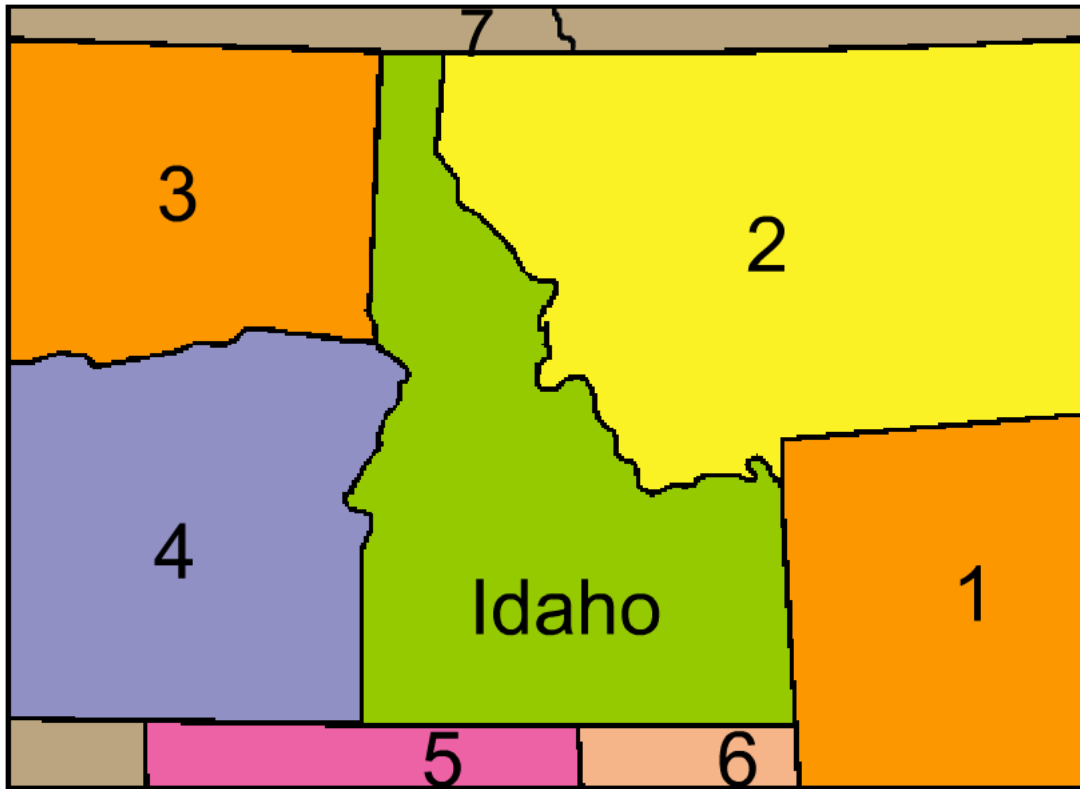


Labels

Wyoming
Washington
Utah
British Columbia (Canada)
Nevada
Montana
Oregon

1.
2.
3.
4.
5.
6.
7.

Idaho Label-me Map – Bordering States and Bodies of water



Labels

Wyoming
Washington
Utah
British Columbia (Canada)
Nevada
Montana
Oregon

1. Wyoming

2. Montana

3. Washington

4. Oregon

5. Nevada

6. Utah

7. British Columbia (Canada)



Eastern Bluebird



Western Bluebird



Mountain Bluebird

Bluebirds are among the most well-known and popular groups of birds in North America. They are members of the thrush family and are thus related to robins. There are three species of bluebirds: the eastern bluebird, the western bluebird, and the mountain bluebird. Bluebirds can grow to lengths of about seven inches. They weigh a couple of ounces.

The Eastern Bluebird – This bird is common in southeastern Canada, the eastern United States, and northern Mexico. It eats insects and berries and can be attracted to feeders with mealworms. Males are sky blue above and orange below. Females are similar to males but paler in coloration. Eastern bluebirds nest in tree cavities but can be attracted to man-made nest boxes. They are usually found in open areas with scattered trees, including suburban neighborhoods. The eastern bluebird is the state bird of New York and Missouri.

The Western Bluebird – The western bluebird is similar to the eastern bluebird. It is found mostly in the western United States and northern Mexico. Like the other bluebirds, the western bluebird nests in tree cavities or man-made nest boxes. Unlike the other bluebirds, however, western bluebirds prefer forests rather than open areas. Males look like male eastern bluebirds except they have orange on their backs. Females are more grayish than males.

The Mountain Bluebird – The mountain bluebird is found in western North America. Unlike the western bluebird however, it can be found as far north as Alaska and northern Canada. The mountain bluebird is found in alpine meadows and open areas. It often feeds by catching insects in mid-air. Males are dazzling blue above and lighter blue below. Males are told from other bluebirds by a lack of orange on the underparts. Female mountain bluebirds are largely gray with hints of blue. Mountain bluebirds nest in tree cavities and man-made nest boxes. The mountain bluebird is the state bird of Idaho and Nevada.

- 1. Which is NOT something all three bluebirds have in common?**
 - A. Females have duller colorations than males
 - B. All are state birds of at least one state
 - C. All bluebirds are related to robins
 - D. All will nest in man-made boxes
- 2. How is the mountain bluebird dissimilar to the other bluebirds?**
 - A. It lacks orange on its underparts
 - B. It prefers open area habitats
 - C. It nests in tree cavities
 - D. It is about seven inches in length
- 3. What do the mountain bluebird and eastern bluebird have in common?**
 - A. They are both found in the same parts of the United States.
 - B. They both hunt insects in mid-air
 - C. They both prefer open area habitats
 - D. They both have similar colorations
- 4. Which is NOT true?**
 - A. Two of the three bluebirds live in the same kinds of habitats
 - B. Two of the three bluebirds live primarily in the western part of North America
 - C. All three sometimes nest in tree cavities
 - D. All three will catch insects in flight
- 5. Which could be a title for this passage?**
 - A. Bluebirds of the Western United States
 - B. Comparing and Contrasting the Three Bluebirds Species
 - C. Bluebird Conservation
 - D. Attracting Bluebirds to Your Yard

Fact or Fiction?

Name: _____



IDAHO

The Gem State




Capital: Boise
Population: 1,429,096 (39th)
Area: 83,574 sq. miles (14th)
Date of Union Entry: 7/3/1890 (43)
Bird: Mountain Bluebird
Tree: Western white pine
Motto: "Esto perpetua" - May it Endure Forever
Flower: Syringa
Highest Point: Borah Peak - 12,662 feet
Largest City: Boise
Attractions: Craters of the Moon, Lewis and Clark NHT

	FACT	FICTION
Idaho is NORTH of Nevada and Utah		
Oregon is WEST of Idaho		
Montana is EAST of Washington		
Boise is NORTHEAST of Twin Falls		
The Oregon Trail is in SOUTHERN Idaho		
Lewiston is NORTHEAST of Pocatello		
Pocatello is NORTHWEST of Twin Falls		
The Salmon River is SOUTH of the Snake River		

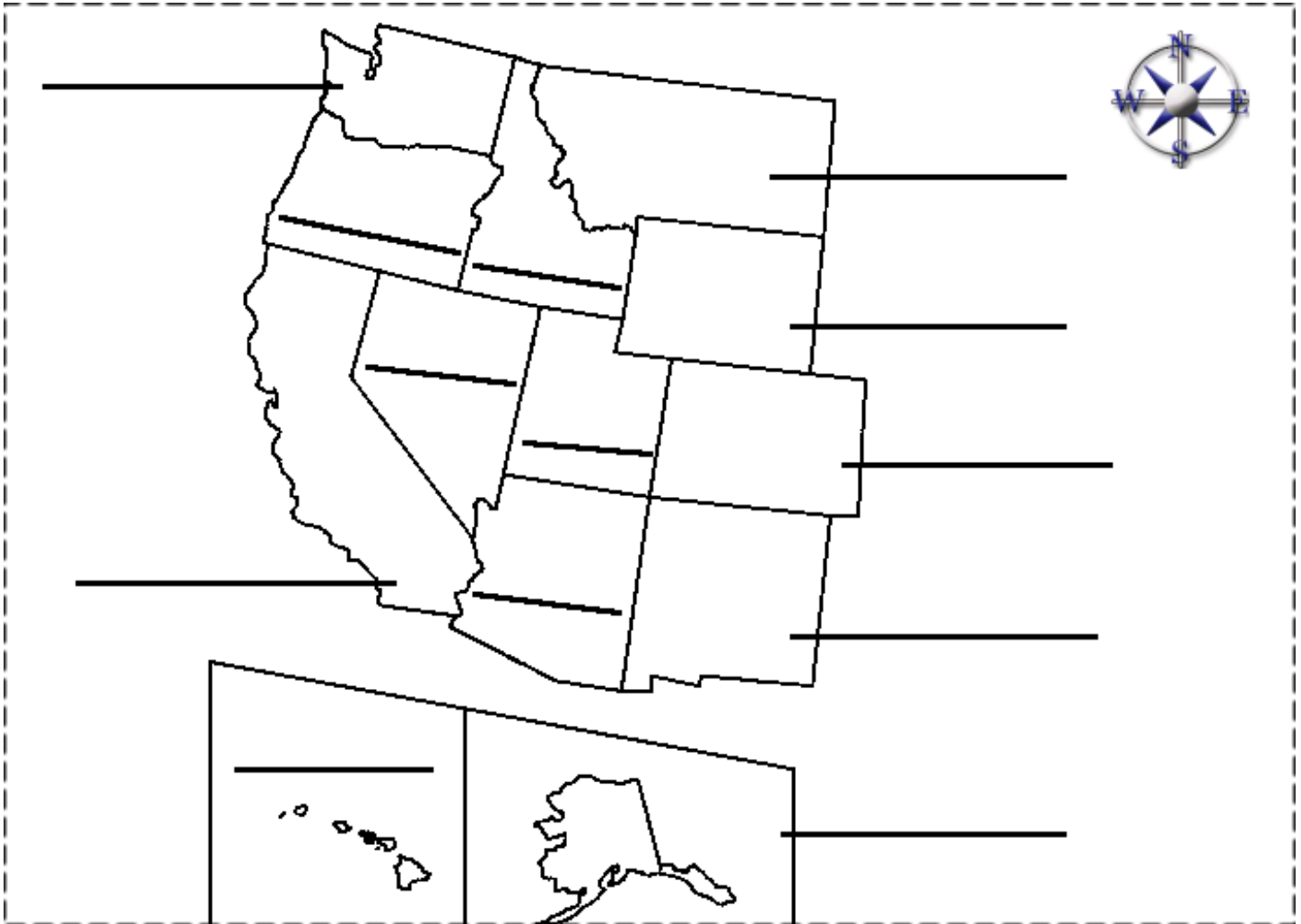
Answers:

	FACT	FICTION
Idaho is NORTH of Nevada and Utah	X	
Oregon is WEST of Idaho	X	
Montana is EAST of Washington	X	
Boise is NORTHEAST of Twin Falls		X
The Oregon Trail is in SOUTHERN Idaho	X	
Lewiston is NORTHEAST of Pocatello		X
Pocatello is NORTHWEST of Twin Falls		X
The Salmon River is SOUTH of the Snake River		X



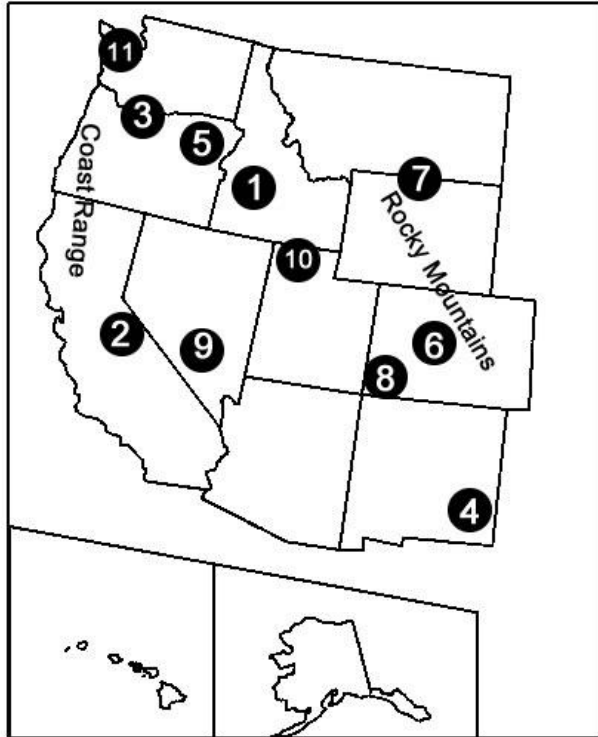
Idaho stamp

25 cents



Directions: Fill in the blanks with the correct numbers that correspond to the various ranges.

Western Ranges



- 1.) The Cascades Range is located in Washington state and Oregon. It is represented by number _____.
- 2.) The Monitor Range is entirely within in the state of Nevada. It is represented by number _____.
- 3.) The Sacramento Range is located in eastern New Mexico. It is represented by number _____.
- 4.) The Bitterroot Range is located in southern Idaho. It is represented by number _____.
- 5.) The Wasatch Range is located in northern Utah. It is represented by number _____.
- 6.) The Blue Mountains are located in northeastern Oregon. These mountains are represented by number _____.
- 7.) The Olympic Range is located in western Washington. These mountains are represented by number _____.
- 8.) The Bighorn Range is located on the Montana/Wyoming border. It is represented by number _____.
- 9.) The Sierra Nevada Range is located in eastern California. It is represented by number _____.
- 10.) The San Juan Mountains are located in southwestern Colorado. These mountains are represented by number _____.
- 11.) The Sangre de Cristo Range is located in central Colorado. It is represented by number _____.

Answers:

1.) 3

2.) 9

3.) 4

4.) 1

5.) 10

6.) 5

7.) 11

8.) 7

9.) 2

10.) 6

11.) 8

MR. NUSSBAUM

LEARNING + FUN

www.mrnussbaum.com



Sacagawea - **29** cents

What did she look like?

Did you know there are no known pictures of Sacagawea? The images that you may have seen of her, on the United States \$1 coin, or, 29 cent postage stamp, are simply educated guesses of what she looked like. Look at the commemorative images of her below and craft your own picture of her.



U.S. Dollar Coin



U.S. Postage Stamp



Sacagawea Statue

Your Picture



Lewis and Clark – “The Climb”

In the late of Summer of 1805, Lewis and Clark and the Corps of Discovery had made it to the Lemhi Pass in Idaho. Lewis expected to see the passage that had tantalized explorers for several centuries – the Northwest Passage, a waterway that led straight to the Pacific Ocean. After nearly a year of traveling through the wilderness, Lewis’s expectations were dashed when all he saw were endless tall peaks – not the Northwest Passage or Pacific Ocean. His final destination was still hundreds of miles away.

As Miley Cyrus once said “Ain't about what's waitin' on the other side..It's the climb.”

Think about a time when you had to make the climb; when you worked really hard to complete an assignment, make a team, or reach a goal, and when you thought you were there, you realized there was so much more work to do. Describe your climb and what you learned from making it.

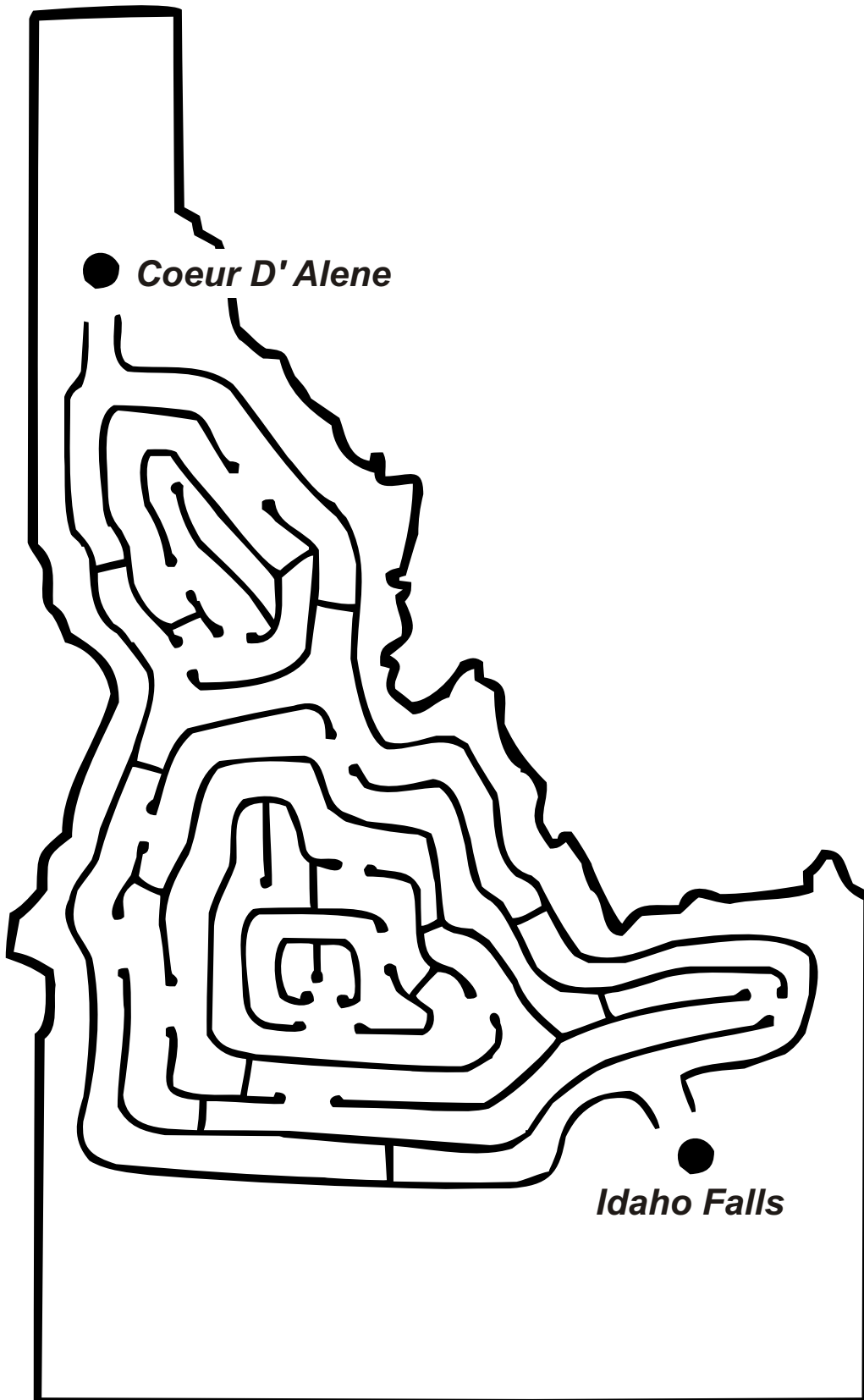
This image shows a single sheet of white paper with horizontal blue or grey ruling lines. The lines are evenly spaced and run across the width of the page. There are approximately 20 lines visible. The paper has a slight shadow on the right side, suggesting it's resting on a surface.



A Dynamic Duo

Meriwether Lewis and William Clark personified teamwork through the duration of their legendary expedition. Both men had qualities that complemented one another. For example, Lewis was an excellent and fair leader, a prolific writer, and a skilled outdoorsman. Clark excelled at making maps and finding his way through difficult or unfamiliar terrain. Together, their actions and decisions had much to do with the expedition only losing one person in the entire voyage (and Charles Floyd died of a burst appendix). Can you think of other dynamic duos in literature, television, the movies, or sports? Draw them below and describe why they work well together.

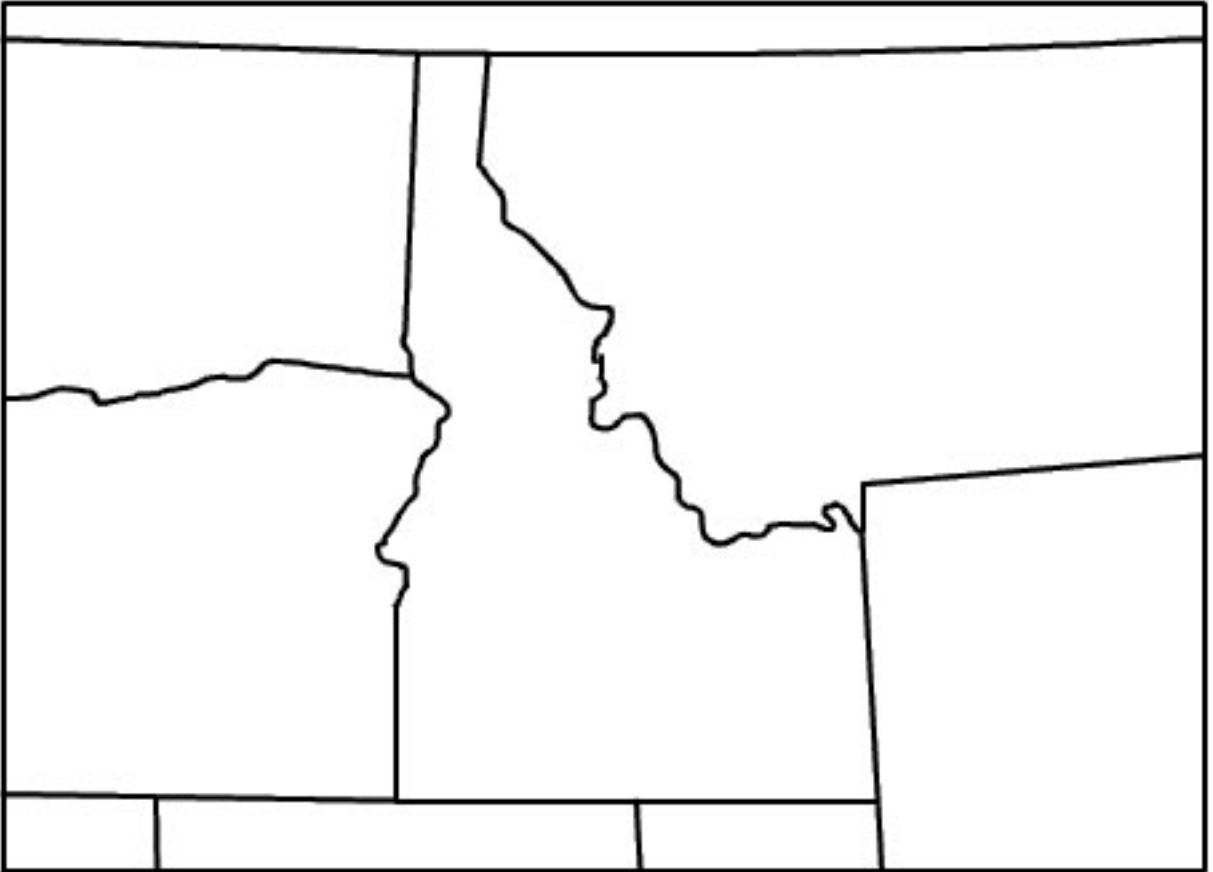
Name of the Duo	Why do they Work Well together?



Idaho - The Gem State



Idaho Printable Outline Map



Comparing and Contrasting Idaho and Montana

Name: _____

Idaho

Located in the western United States, Idaho is the nation's 14th largest state. It borders six other states: Montana, Wyoming, Nevada, Utah, Oregon, and Washington. It borders Canada to the north. Idaho became America's 43rd state on July 3, 1890. It is nicknamed the Gem State but is sometimes called the Panhandle State. A panhandle is a narrow, rectangular strip of land that extends from the main part of a state into another. Idaho and Oklahoma are among states with panhandles. Idaho's capital and largest city is Boise. Idaho, however, is probably best known for its potatoes. The state is responsible for about a third of all potatoes produced in America. Much of Idaho is dominated by the Rocky Mountains, although a small part of southwestern Idaho is classified as desert. Idaho is home to about 1.7 million people. The mountain bluebird is its state bird.

Montana

Montana, nicknamed the Big Sky State, is America's 4th largest state. It is located in the western United States and borders North and South Dakota, Wyoming, and Idaho. It borders Canada to the north. Montana became America's 41st state on November 8, 1889. It recently passed one million people for the first time in its history. While eastern Montana features prairies and badlands, western Montana is dominated by the Rocky Mountains. Montana's Glacier National Park is one of its most popular tourist attractions. A small portion of Yellowstone National Park, which is mostly in Wyoming, spills into Montana as well. Montana, and five other states, honor the western meadowlark as state birds.

Which facts belong in each category?

Has more than one million people
Became a state first
Is known for potatoes
Has a national park
Has more people
Has beaches
Borders Washington
Has more people
Borders Canada
Borders more states

Idaho
Both
Montana
Neither

Answers:

Idaho

Is known for potatoes
Has more people
Borders Washington
Has more people
Borders more states

Both

Has more than one million people
Borders Canada

Montana

Became a state first
Has a national park

Neither

Has beaches

Comparing and Contrasting Idaho and Wyoming

Name: _____

Idaho

Located in the western United States, Idaho is the nation's 14th largest state. It borders six other states: Montana, Wyoming, Nevada, Utah, Oregon, and Washington. It borders Canada to the north. Idaho became America's 43rd state on July 3, 1890. It is nicknamed the Gem State but is sometimes called the Panhandle State. A panhandle is a narrow, rectangular strip of land that extends from the main part of a state into another. Idaho and Oklahoma are among states with panhandles. Idaho's capital and largest city is Boise. Idaho, however, is probably best known for its potatoes. The state is responsible for about a third of all potatoes produced in America. Much of Idaho is dominated by the Rocky Mountains, although a small part of southwestern Idaho is classified as desert. Idaho is home to about 1.7 million people. The mountain bluebird is its state bird.

Wyoming

Wyoming, nicknamed the Equality State is located in the western United States. Its capital and largest city is Cheyenne. It earned its nickname from the fact that it was the first state to elect a woman as governor. Wyoming, much like Colorado, is rectangular in shape. It borders South Dakota, Idaho, Montana, Colorado, Utah, and Nebraska. Eastern Wyoming is mostly prairies, whereas western and central Wyoming are covered by the Rocky Mountains. Yellowstone National Park, located in northwestern Wyoming, is America's oldest national park. The park sits on top of a massive caldera and is famous for its incredible beauty, wildlife, and interesting formations. Wyoming became America's 44th state on July 10, 1890. Even though it is the 10th largest state, it is America's least populous state.

Which facts belong in each category?

Has less people
Became a state first
Borders Utah
Is in the Midwestern United States
Has the Rocky Mountains
Is rectangular in shape
Had the first woman governor
Has more people
Borders Canada
Is a larger state by area

Idaho
Both
Wyoming
Neither

Answers:

Idaho

**Became a state first
Has more people
Borders Canada**

Both

**Borders Utah
Has the Rocky Mountains**

Wyoming

**Has less people
Is rectangular in shape
Had the first woman governor
Is a larger state by area**

Neither

Is in the Midwestern United States



Sacagawea

Sacagawea was born sometime around 1790. She is best known for her role in assisting the Lewis and Clark expedition. She, along with her husband, were guides from the Great Plains to the Pacific Ocean and back.

Sacagawea was kidnapped from her Shoshone village by Hidatsa Indians when she was twelve years old. She was promptly sold into slavery. She was then sold to a French fur trapper by the name of Toussaint Charbonneau. The pair became married and had a son named Jean-Baptiste.

Although there are conflicting opinions concerning how important Sacagawea was to the Lewis and Clark expedition, she did serve as the interpreter and negotiator to the Shoshone tribe - that was led by her brother Cameahwait. She helped them obtain essential supplies and horses while she carried her infant son on her back. Furthermore, Sacagawea helped identify edible plants and herbs and prevented hostile relations with other tribes simply by being with the expedition. She was even more important on the return trip because she was familiar with the areas in which they were traveling and was able to guide the expedition back safely. Lewis and Clark received credit for discovering hundreds of animals and plants that Sacagawea had probably seen for years. Although she received no payment for her help, her husband was rewarded with cash and land.

Six years after the journey, Sacagawea died after giving birth to her daughter Lisette. William Clark adopted both of her children, but there are no records of Lisette. To this day, there are no reliable pictures or drawings of Sacagawea. Recently, the United States government engraved her image on the new one dollar coin. Sacagawea is buried in Lander, Wyoming.

1.) Sacagawea originally came from the _____ tribe.

- A. Shoshone
- B. Hidatsa
- C. Sioux
- D. Wyoming

2.) Sacagawea was a _____.

- A. warrior
- B. princess
- C. slave
- D. spy

3.) Who was Jean-Baptiste?

- A. Sacagawea's brother
- B. Sacagawea's husband
- C. An Indian chief
- D. Sacagawea's son

4.) What does the word 'promptly' mean in the following sentence:

She was **promptly** sold into slavery.

- A. never
- B. quickly
- C. finally
- D. controversially

5.) Historians are _____ concerning how important Sacagawea was in the Lewis and Clark expedition.

- A. in agreement
- B. not in agreement
- C. sure
- D. intolerant

6.) Sacagawea DID NOT:

- A. Help translate for Lewis and Clark
- B. Help negotiate for Lewis and Clark
- C. Help Lewis and Clark find food
- D. Help Lewis and Clark plan to ambush Indians

7.) Sacagawea was given _____ for help on the Lewis and Clark expedition.

- A. cash
- B. awards
- C. land
- D. nothing

8.) Lewis and Clark saw animals that

- A. No one had ever seen before
- B. Had long since been forgotten
- C. Were likely known by Sacagawea and Native Americans.
- D. Were thought to be extinct

9.) There is no record of....

- A. Sacagawea's daughter
- B. Sacagawea's son
- C. Sacagawea
- D. All of the above

10.) Which of the following IS NOT known about Sacagawea?

- A. What tribe she was from
- B. The names of her children
- C. The approximate year of her birth
- D. What she looked like

Fact or Fiction?

Name: _____

Below is a passage on Sacagawea. On the following page is a chart with ten statements. Indicate whether each statement is fact or fiction.

Sacagawea was born sometime around 1790. She is best known for her role in assisting the Lewis and Clark expedition. She and her husband were guides from the Great Plains to the Pacific Ocean and back.

Kidnapped and Sold into Marriage

Sacagawea was kidnapped from her Shoshone village by Hidatsa Indians when she was twelve years old. She was promptly sold into slavery. She was then sold to a French fur trapper by the name of Toussaint Charbonneau. The pair became married and had a son named Jean-Baptiste.

On the Lewis and Clark Expedition

Although there are conflicting opinions concerning how important Sacagawea was to the Lewis and Clark expedition, she did serve as the interpreter and negotiator to the Shoshone tribe - that was led by her brother Cameahwait. She helped them obtain essential supplies and horses while she carried her infant son on her back. Furthermore, Sacagawea helped identify edible plants and herbs and prevented hostile relations with other tribes simply by being with the expedition. She was even more important on the return trip because she was familiar with the areas in which the expedition was traveling. Lewis and Clark received credit for discovering hundreds of animals and plants that Sacagawea had probably seen for years. Although she received no payment for her help, her husband was rewarded with cash and land.

Death and Adoption of her Children

Six years after the journey, Sacagawea died after giving birth to her daughter Lisette. William Clark adopted both of her children, but there are no records of Lisette. To this day, there are no reliable pictures or drawings of Sacagawea. Recently, the United States government engraved her image on the new one-dollar coin. Sacagawea is buried in Lander, Wyoming.

	FACT	FICTION
Sacagawea's exact birthdate is unknown.		
Sacagawea was a member of the Hidatsa tribe, and was kidnapped as a child by members of the Shoshone tribe.		
Sacagawea was a slave for part of her life.		
Sacagawea was sold to an English fur trapper. They had a son named Jean-Baptiste.		
There is disagreement concerning Sacagawea's actual role in the Lewis and Clark expedition.		
Sacagawea's presence within the Lewis and Clark expedition likely prevented hostile encounters with Native American groups.		
Animals and plants that Lewis and Clark were credited with "discovering" were likely known by Sacagawea and other Native Americans for a long time.		
Historians believe Sacagawea was more important in the Lewis and Clark expedition on the way to the Pacific Ocean, rather than on the return trip.		
Sacagawea and her husband received payment for their parts in the Lewis and Clark expedition.		
There are no photographs or reliable portraits of Sacagawea in existence.		

Answers:

	FACT	FICTION
Sacagawea's exact birthdate is unknown.	X	
Sacagawea was a member of the Hidatsa tribe, and was kidnapped as a child by members of the Shoshone tribe.		X
Sacagawea was a slave for part of her life.	X	
Sacagawea was sold to an English fur trapper. They had a son named Jean-Baptiste.		X
There is disagreement concerning Sacagawea's actual role in the Lewis and Clark expedition.	X	
Sacagawea's presence within the Lewis and Clark expedition likely prevented hostile encounters with Native American groups.	X	
Animals and plants that Lewis and Clark were credited with "discovering" were likely known by Sacagawea and other Native Americans for a long time.	X	
Historians believe Sacagawea was more important in the Lewis and Clark expedition on the way to the Pacific Ocean, rather than on the return trip.		X
Sacagawea and her husband received payment for their parts in the Lewis and Clark expedition.		X
There are no photographs or reliable portraits of Sacagawea in existence.	X	

